











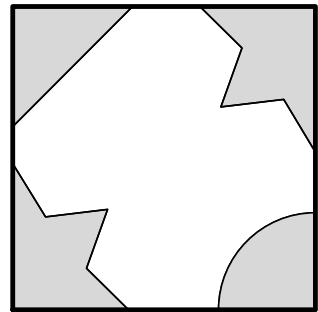


Name: \_\_\_\_\_

### Quartex: Finding a Place for a Piece

If you could start the game with any piece, which one would it be? Draw a picture and explain why with words.

What are **ALL** the **DIFFERENT** ways you could place the piece pictured on the game board? Use the tiles below to show (draw). Explain how you know you have all.



Name: \_\_\_\_\_

**While we played:**

A good move/strategy \_\_\_\_\_ shared was:

A good move/strategy \_\_\_\_\_ shared was:

**After we played:**

Here's what we did to find the best place to play (use drawings and words):

Here's what we did to try to finish a shape and get a point (use drawings and words):